

Calculus 140, section 3.5 Higher Order Derivatives

notes by Tim Pilachowski

Given a function $f(x) = x^r$ where r is a non-zero real number, $f'(x) = r x^{r-1}$ [section 3.2, 3.3, 3.4]

$$\frac{d}{dx}[\sin x] = \cos x, \quad \frac{d}{dx}[\cos x] = -\sin x, \quad \frac{d}{dx}[e^x] = e^x, \quad \frac{d}{dx}[\ln x] = \frac{1}{x} \quad [\text{section 3.2, 3.4}]$$

$$(f + g)'(x) = f'(x) + g'(x) \quad [\text{Thm 3.4}], \quad \frac{d}{dx}[c * f(x)] = c * f'(x) \quad [\text{Thm 3.5}]$$

$$(f * g)'(x) = f(x) * g'(x) + g(x) * f'(x) \quad [\text{Thm 3.6}], \quad \left(\frac{f}{g}\right)'(x) = \frac{g(x) * f'(x) - f(x) * g'(x)}{[g(x)]^2} \quad [\text{Thm 3.7}]$$

$$\frac{d}{dx}g[f(x)] = g'[f(x)] * f'(x) \quad [\text{Thm 3.8}]$$

Recall, however, that the first derivative is itself a function, which has its own domain and its own graph. Since it is a function, it also has its own derivative. Given a function f , we can calculate the first derivative f' or $\frac{dy}{dx}$.

We can then calculate the derivative of f' , i.e. the second derivative of f , symbolically $f''(x) = \frac{d^2y}{dx^2}$.

Important note: Just like $\frac{dy}{dx}$ is *not* a fraction, but is a notation for the first derivative, $\frac{d^2y}{dx^2}$ is also not a fraction but a notation. *There is no multiplication involved!* Rather, you need to interpret it this way:

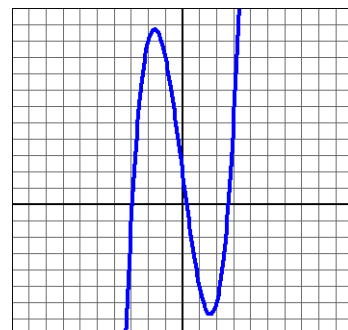
$$\frac{d^2y}{dx^2} = \frac{d}{dx}\left(\frac{dy}{dx}\right) \text{ which means "the derivative of } \frac{dy}{dx} \text{", the derivative of a derivative.}$$

In a similar fashion, we can find higher-order derivatives.

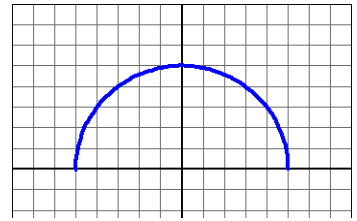
$$\frac{d}{dx}[f(x)] = f'(x) = \frac{dy}{dx}, \quad \frac{d}{dx}[f'(x)] = f''(x) = \frac{d^2y}{dx^2}, \quad \frac{d}{dx}[f''(x)] = f^{(3)}(x) = \frac{d^3y}{dx^3}, \quad \frac{d}{dx}[f^{(3)}] = f^{(4)}(x) = \frac{d^4y}{dx^4}$$

$$\frac{d}{dx}[f^{(n-1)}] = f^{(n)}(x) = \frac{d^ny}{dx^n}$$

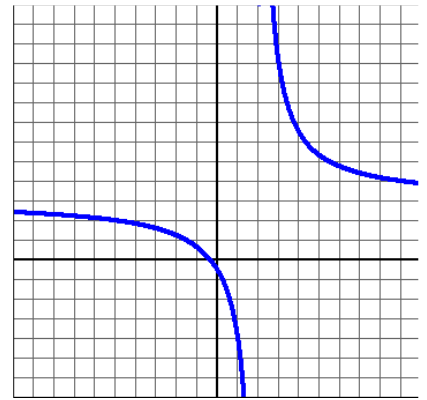
Example A: Given $f(x) = x^3 - 8x + 2$, find all higher derivatives of f .



Example B: Given $f(x) = \sqrt{25 - x^2}$, find the second derivative. *answer:* $\frac{-25}{(25-x^2)^{3/2}}$



Example C: Given $f(x) = \frac{3x+1}{x-2}$, find $f(x) = \frac{d^3y}{dx^3}$. *answer:* $\frac{-42}{(x-2)^4}$



In Examples B and C, we needed the Quotient Rule. Your text, in Example 6, uses the Product Rule, to find the first three derivatives of $y = x \sin x$.

The text also, in Example 5, demonstrates that for functions $f(x) = e^{cx}$, the n^{th} derivative is $f^{(n)}(x) = c^n e^{cx}$.

Example D: Given $f(x) = \ln x$, find a formula for the n^{th} derivative of f for $n \geq 1$. *answer:* $(-1)^{n-1} [(n-1)!] x^{-n}$

We have already, in earlier sections, determined that velocity is the first derivative of a position function. But velocity is not always constant. Rather, it changes. Sometimes we go slower; sometimes we speed up. The rate of change of velocity is called acceleration.

The derivative of velocity is acceleration.

The derivative of [the derivative of position] is acceleration.

The second derivative of a position function is acceleration.

(Read through the text's explanation and example 7.)

Example E: The three graphs below (in no particular order) are graphs of $h(t)$, the height of a toy helicopter above the ground, $v(t)$ [the velocity of the helicopter], and $a(t)$ [the acceleration of the helicopter]. Use your knowledge of first and second derivatives to determine which graph is of which function. Justify your answer.

